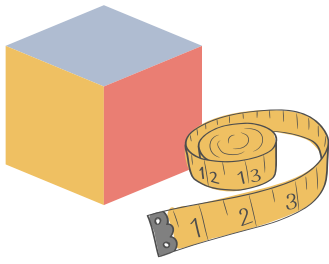


Name: _____

Date: _____




NON-STANDARD MEASUREMENT

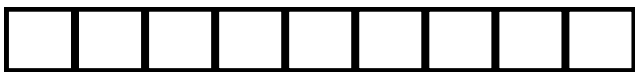

Count how many cubes long each object is. Write the number of cubes in the line provided.



About ____ cubes long.



About ____ cubes long.




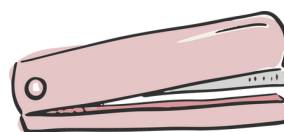
About ____ cubes long.



About ____ cubes long.



About ____ cubes long.



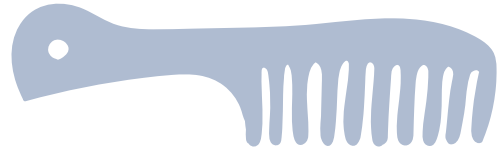
About ____ cubes long.




ANSWER KEY



About 9 cubes long.



About 7 cubes long.



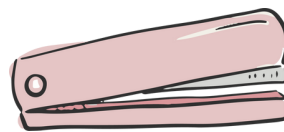
About 5 cubes long.



About 8 cubes long.



About 7 cubes long.



About 4 cubes long.